





3. Hallando las sumas:

+2		+4		+5		+6	
15		6		10		7	
8		10		6		12	
17		13		13		8	
12		15		9		10	
10		7		7		13	

**RESTAMOS**



Primero se restan las unidades y luego se restan las decenas

	D	U
	1	7
-		4

17	-	4	=	
----	---	---	---	--

**ACTIVIDAD**

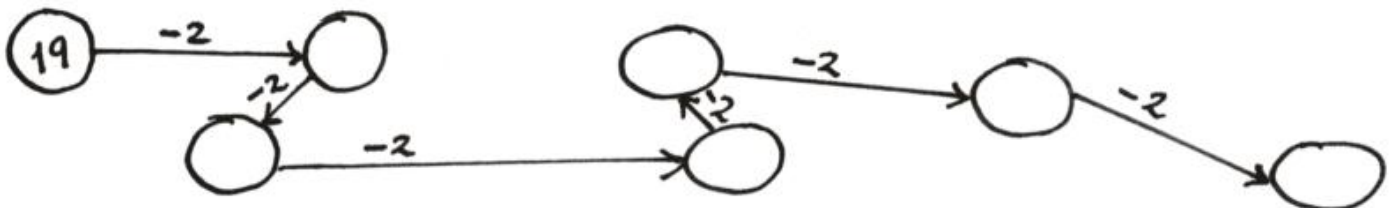
1. HALLA la diferencia:

D U	D U	D U	D U	D U
1 4	1 5	1 2	1 4	1 7
- 4	- 3	- 1	- 1 3	- 1 2

D U	D U	D U	D U	D U
1 7	1 9	1 8	1 4	1 2
- 5	- 1 3	- 4	- 3	- 1 0

2. CALCULA





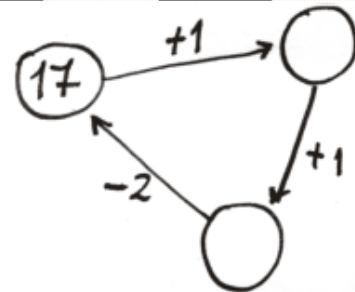
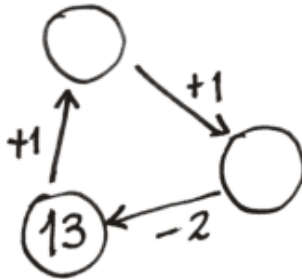
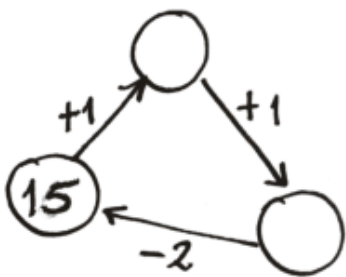
3. COLOREA del mismo color las parejas que tienen igual diferencia.

$16 - 16$	$14 - 2$	$14 - 1$	$16 - 1$
$16 - 3$	$9 - 9$		
$13 - 3$	$15 - 5$		
$17 - 2$			

### SUMAS Y RESTAS

1. COMPLETA los diagramas.

$13 \xrightarrow{+4} \square \xrightarrow{-7} \square$	$15 \xrightarrow{-2} \square \xrightarrow{+6} \square$
$18 \xrightarrow{-6} \square \xrightarrow{+5} \square$	$10 \xrightarrow{-3} \square \xrightarrow{+0} \square$

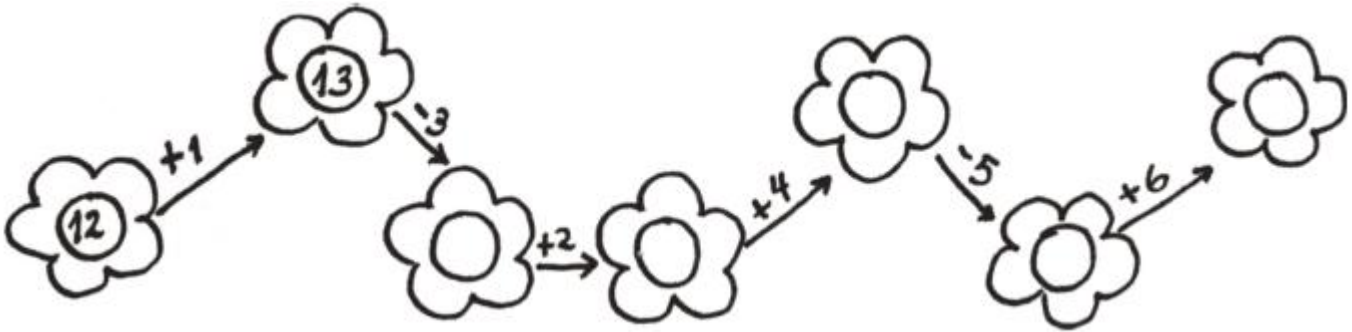


2. ENCUESTRA la suma o la resta.

$\begin{array}{r} 6 \\ - 4 \\ \hline \end{array}$	$\begin{array}{r} 10 \\ - 7 \\ \hline \end{array}$	$\begin{array}{r} 19 \\ - 4 \\ \hline \end{array}$	$\begin{array}{r} 18 \\ - 13 \\ \hline \end{array}$	$\begin{array}{r} 13 \\ - 5 \\ \hline \end{array}$
$\begin{array}{r} 9 \\ - 5 \\ \hline \end{array}$	$\begin{array}{r} 12 \\ - 4 \\ \hline \end{array}$	$\begin{array}{r} 18 \\ - 8 \\ \hline \end{array}$	$\begin{array}{r} 15 \\ - 6 \\ \hline \end{array}$	$\begin{array}{r} 15 \\ - 2 \\ \hline \end{array}$



3. COMPLETA:



4. RESUELVE:

