

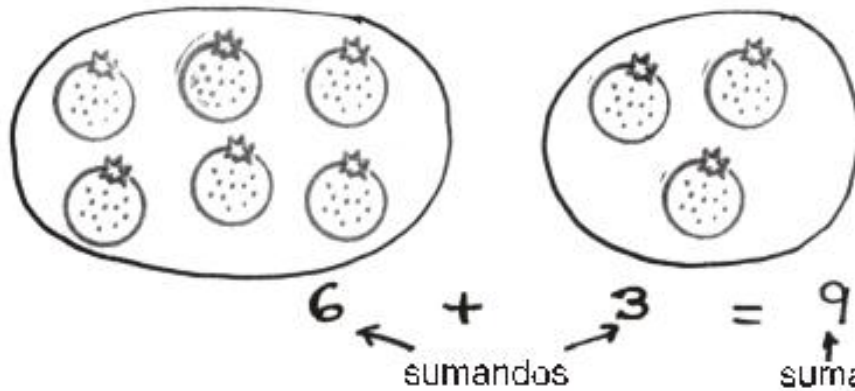


ADICIÓN DE NÚMEROS DEL 0 AL 9

DESCARGAMATEMATICAS.COM

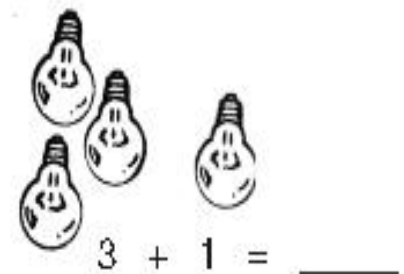
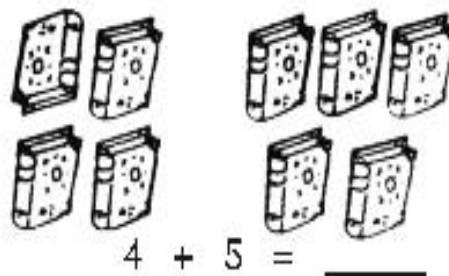
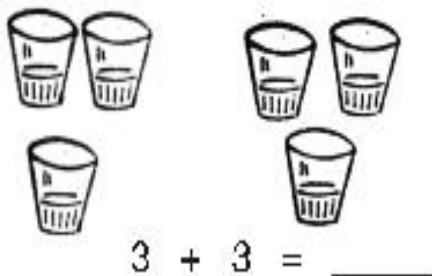


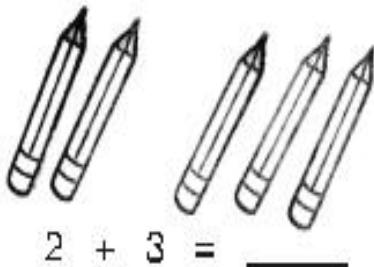
1° PRIMARIA

Los términos de la adición son los sumandos y la suma



6	sumandos
+ 3	
9	← suma



1. SUMA






2. CUENTA y COMPLETA

	→	<input type="text"/>		→	<input type="text"/>		→	<input type="text"/>
	+	<input type="text"/>		+	<input type="text"/>		+	<input type="text"/>
		<input type="text"/>			<input type="text"/>			<input type="text"/>

	→	<input type="text"/>		→	<input type="text"/>		→	<input type="text"/>
	+	<input type="text"/>		+	<input type="text"/>		+	<input type="text"/>
		<input type="text"/>			<input type="text"/>			<input type="text"/>

Piensa, piensa



3. SUMA de arriba hacia abajo.

2	3	5	8	1
+ 3	+ 1	+ 0	+ 1	+ 0
<hr/>	<hr/>	<hr/>	<hr/>	<hr/>
5	6	4	1	1
+ 3	+ 1	+ 2	+ 2	+ 1
<hr/>	<hr/>	<hr/>	<hr/>	<hr/>



4. SUMA

$0 + 6 = \square$ $8 + 1 = \square$ $6 + 3 = \square$ $4 + 2 = \square$ $3 + 0 = \square$ $0 + 5 = \square$	$0 + 6 = \square$ $8 + 1 = \square$ $6 + 3 = \square$ $4 + 2 = \square$ $3 + 0 = \square$ $0 + 5 = \square$
--	--

5. SUMA

$+1$ 	$+2$ 																												
<table border="1" style="width: 100%; border-collapse: collapse;"> <tr><td style="width: 50%; text-align: center;">3</td><td style="width: 50%;"></td></tr> <tr><td style="text-align: center;">8</td><td></td></tr> <tr><td style="text-align: center;">2</td><td></td></tr> <tr><td style="text-align: center;">6</td><td></td></tr> <tr><td style="text-align: center;">5</td><td></td></tr> <tr><td style="text-align: center;">7</td><td></td></tr> <tr><td style="text-align: center;">1</td><td></td></tr> </table>	3		8		2		6		5		7		1		<table border="1" style="width: 100%; border-collapse: collapse;"> <tr><td style="width: 50%; text-align: center;">3</td><td style="width: 50%;"></td></tr> <tr><td style="text-align: center;">2</td><td></td></tr> <tr><td style="text-align: center;">6</td><td></td></tr> <tr><td style="text-align: center;">5</td><td></td></tr> <tr><td style="text-align: center;">7</td><td></td></tr> <tr><td style="text-align: center;">4</td><td></td></tr> <tr><td style="text-align: center;">1</td><td></td></tr> </table>	3		2		6		5		7		4		1	
3																													
8																													
2																													
6																													
5																													
7																													
1																													
3																													
2																													
6																													
5																													
7																													
4																													
1																													



SUMA EN LA RECTA NUMÉRICA

Primero doy 4 saltos y luego 3 más.

0 1 2 3 4 5 6 7 8 9

▶ $4 + 3 = 7$

CUENTA y ESCRIBE las sumas:

	▶ $4 + \square = \square$
	▶ $\square + \square = \square$
	▶ $\square + \square = \square$
	▶ $\square + \square = \square$
	▶ $\square + \square = \square$
	▶ $\square + \square = \square$
	▶ $\square + \square = \square$
	▶ $\square + \square = \square$